


Számról számra

1. Mennyi pénz lesz a perselyekben, ha a persely mellett lévő pénzeket is beledobjuk? Írd le!




a)

$$\begin{array}{|c|c|c|} \hline & & \\ \hline \end{array} + \begin{array}{|c|c|} \hline & \\ \hline \end{array} = \begin{array}{|c|c|c|c|} \hline & & & \\ \hline \end{array}$$



b)

$$\begin{array}{|c|c|c|} \hline & & \\ \hline \end{array} + \begin{array}{|c|c|} \hline & \\ \hline \end{array} = \begin{array}{|c|c|c|c|} \hline & & & \\ \hline \end{array}$$



c)

$$\begin{array}{|c|c|c|} \hline & & \\ \hline \end{array} + \begin{array}{|c|c|} \hline & \\ \hline \end{array} = \begin{array}{|c|c|c|c|} \hline & & & \\ \hline \end{array}$$

2. Oldd meg a nyitott mondatokat!

a)

$$\begin{array}{c} \text{tulipán} \\ + \\ \text{tulipán} \\ = 600 \end{array}$$

$$\begin{array}{c} \text{tulipán} \\ = \begin{array}{|c|c|c|} \hline & & \\ \hline \end{array} \end{array}$$

b)

$$\begin{array}{c} \text{virág} \\ + \\ \text{virág} \\ = 800 \end{array}$$

$$\begin{array}{c} \text{virág} \\ = \begin{array}{|c|c|c|} \hline & & \\ \hline \end{array} \end{array}$$

c)

$$\begin{array}{c} \text{lupa} \\ + \\ \text{lupa} \\ = 700 \end{array}$$

$$\begin{array}{c} \text{lupa} \\ = \begin{array}{|c|c|c|} \hline & & \\ \hline \end{array} \end{array}$$


d)

$$\begin{array}{c} \text{levelek} \\ + \\ \text{levelek} \\ = 300 \end{array}$$

$$\begin{array}{c} \text{levelek} \\ = \begin{array}{|c|c|c|} \hline & & \\ \hline \end{array} \end{array}$$


3. Milyen számok hiányoznak az autók rendszámairól? Számold ki, és írd be!

a) 340-nél 120-szal nagyobb szám.




KTI-

b) 400-nál a 400 felével több.



SAT-

c) 570-nél 2 százassal és 7 tízessel nagyobb szám.



JPG-

Javítókulcs

1. a) $340 + 30 = 370$, b) $240 + 40 = 280$, c) $420 + 70 = 490$

2. a) 300, b) 400, c) 350, d) 150

3. a) KTI – 460, b) SAT – 600, c) JPG – 840