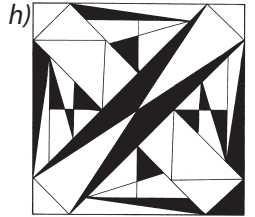
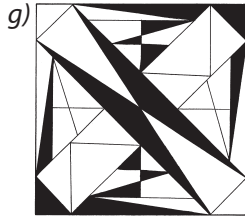

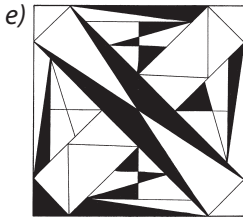
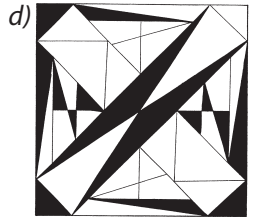
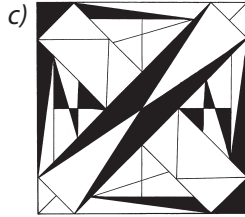
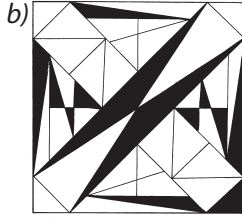
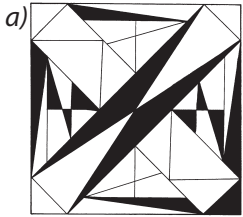



# Szemtorna

1. A nyolc ábra közül csak kettő teljesen egyforma. Melyik ez a kettő?



2. Milyen összetett szavakat ábrázolnak a rajzok? Írd le!



b) \_\_\_\_\_




c) \_\_\_\_\_



a) \_\_\_\_\_



d) \_\_\_\_\_



e) \_\_\_\_\_

## Javítókulcs

1. *d), f)*

2. *a) sátorverés*

*b) csigasor*

*c) jómadár*

*d) hidegtál*

*e) aluljáró*